


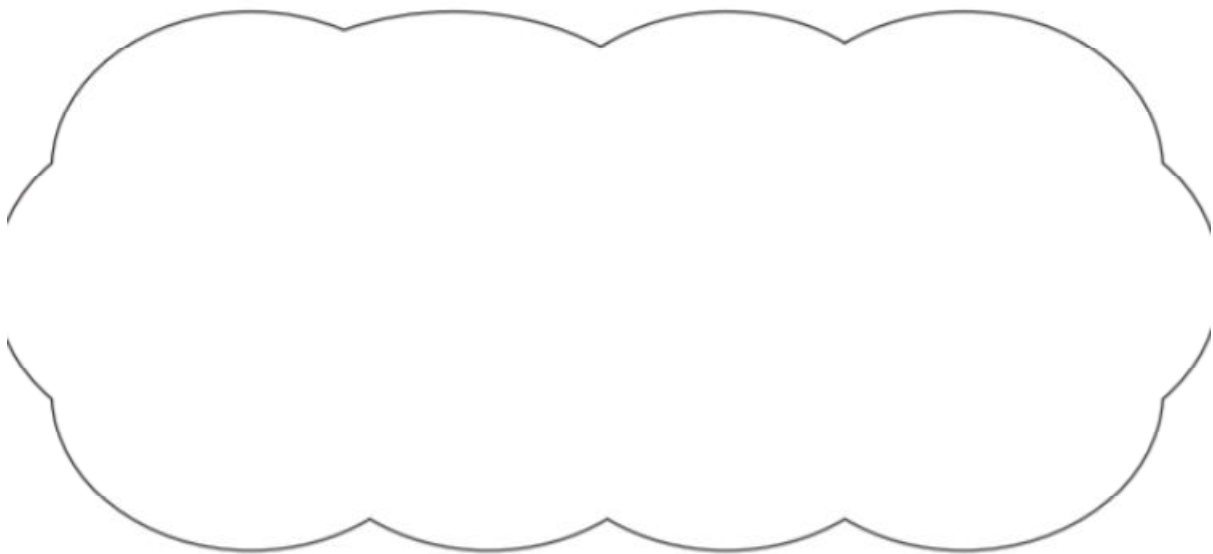
Explain how you know questions.

Adam says,

0.25 is **smaller** than $\frac{2}{5}$



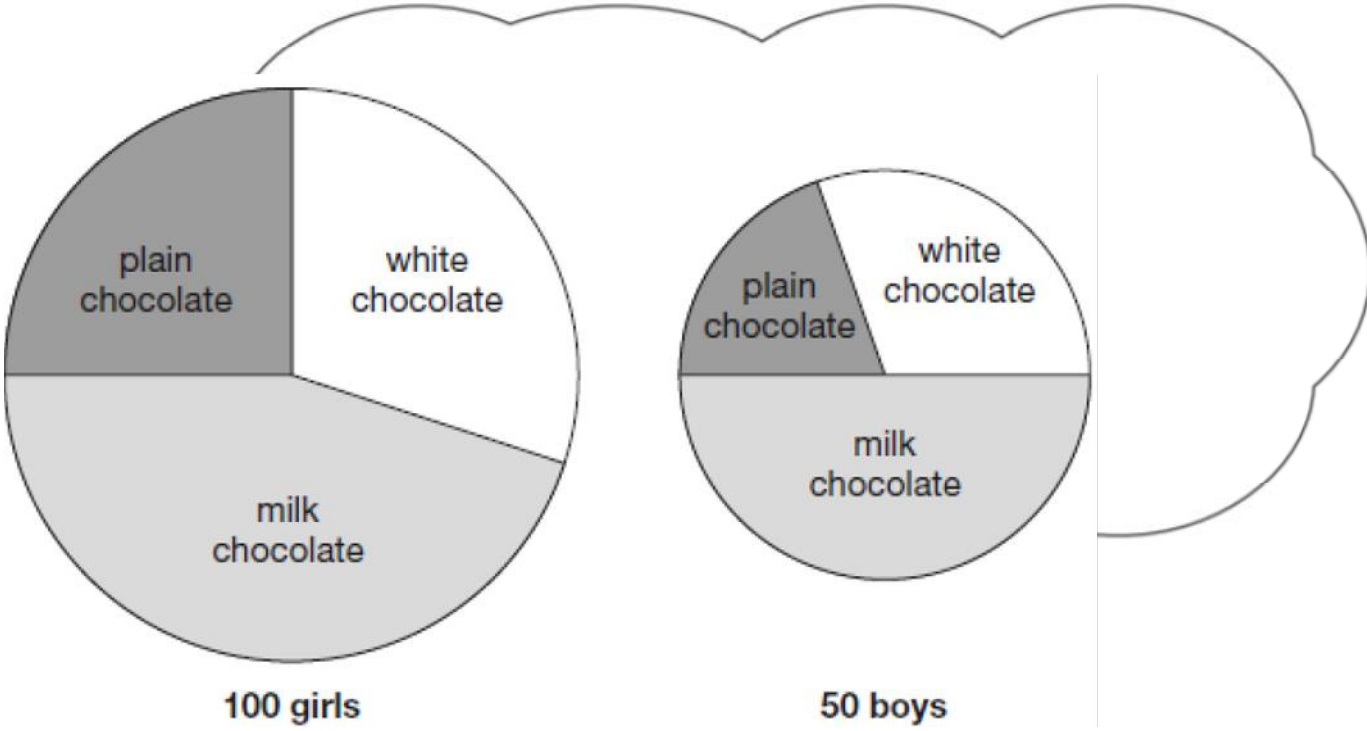
Explain why he is correct.



Adam buys 6 bags of white balloons.

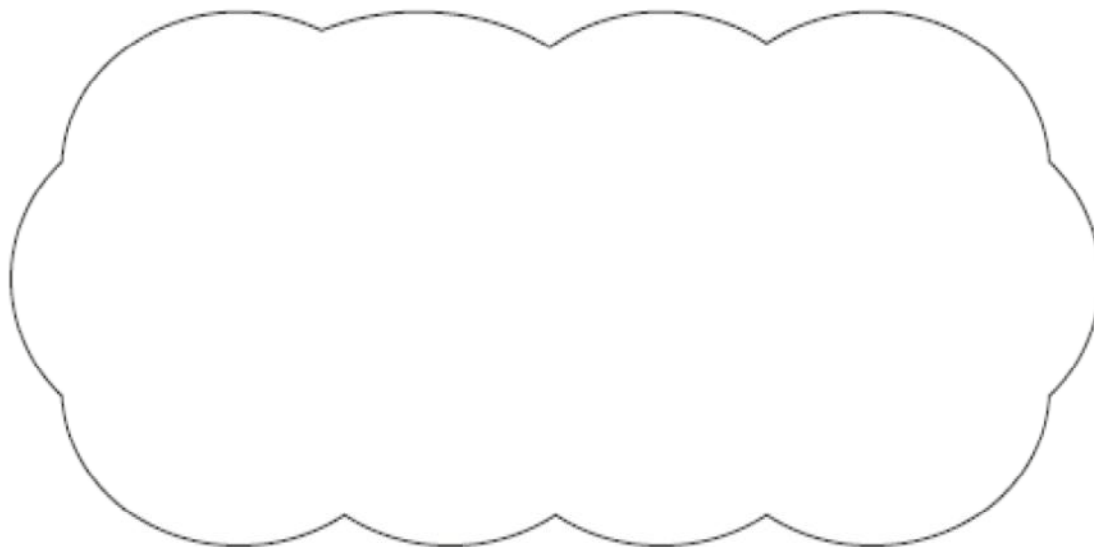
Chen buys 3 bags of red balloons.

Explain why Adam is correct.



Dev says: "The pie charts show that more girls than boys liked milk chocolate best."

Dev is correct. Explain how you know.



Omelettes

Cheese | Onion | Tomato
Mushroom | Ham

Plain Omelette	£3.30
Omelette + 1 Filling	£3.50
Omelette + 2 Fillings	£3.80
Omelette + 3 Fillings	£4.10

Comes with Chips OR Salad

Jacket Potatoes

Cheese | Baked Beans | Tuna Mayo

Potato + One Topping	£3.80
Potato + Two Toppings	£4.10

Comes with small side salad.

Soup and a roll **£3.00**

Sonia and Ben go to the cafe for lunch.

Sonia eats a plain omelette. Ben eats jacket potato with one topping.

Can they pay for their lunch with a £10 note?

Circle **Yes** or **No**
Show how you know.

Explain how you

Is $\frac{4}{9}$ greater than

Circle Yes or No

