













<p>Baked Beans (4 x 410g)</p> 	<p>Mixed Weight Eggs (6)</p> 	<p>Bananas (4)</p> 	<p>Packet of Biscuits (400G)</p> 	<p>Bag of Sugar (3kg)</p> 
<p>Savewell £3.24 Cutcosts £3.20 Spendless £3.19 Lowcost £3.26 Thrifty's £3.15</p>	<p>Savewell £1.29 Cutcosts £1.25 Spendless £1.27 Lowcost £1.24 Thrifty's (15% off price!) £1.40</p>	<p>Savewell £2.50 Cutcosts (Buy one, get one half price!) £2.48 Spendless £2.52 Lowcost £2.49 Thrifty's £2.51</p>	<p>Savewell £2.62 Cutcosts £2.66 Spendless (Buy one, get one half price!) £2.64 Lowcost £2.68 Thrifty's £2.70</p>	<p>Savewell (5% off price!) £2.20 Cutcosts £2.25 Spendless £2.21 Lowcost £2.28 Thrifty's £2.30</p>
<p>Bag of Red Apples (6)</p> 	<p>Nacho Crisps (6 x25g)</p> 	<p>Baguette (400g)</p> 	<p>Spaghetti (500g)</p> 	<p>Orange Juice (6 x 200ml)</p> 
<p>Savewell £1.36 Cutcosts £1.35 Spendless (Buy one, get one free!) £1.40 Lowcost £1.38 Thrifty's £1.37</p>	<p>Savewell £2.73 Cutcosts £2.71 Spendless £2.79 Lowcost (30% off price!) £2.80 Thrifty's £2.75</p>	<p>Savewell £1.06 Cutcosts £1.10 Spendless (Buy one, get one free!) £1.08 Lowcost £1.12 Thrifty's £1.15</p>	<p>Savewell £2.90 Cutcosts £2.86 Spendless £2.91 Lowcost £2.89 Thrifty's £2.79</p>	<p>Savewell £2.20 Cutcosts (25% off price!) £2.28 Spendless £2.24 Lowcost £2.22 Thrifty's £2.26</p>

Shopping on a Budget

The family are on a tight budget. You have been given the task of shopping for the food items below. You need to spend as little money as possible. Calculate how much the shopping will cost at each store.

Shopping List	Savewell	Cutcosts	Spendless	Lowcost	Thrifty's
2 multipacks of beans	_____	_____	_____	_____	_____
1 box of eggs	_____	_____	_____	_____	_____
2 bags of bananas	_____	_____	_____	_____	_____
2 packets of biscuits	_____	_____	_____	_____	_____
1 bag of sugar	_____	_____	_____	_____	_____
2 bags of apples	_____	_____	_____	_____	_____
1 multipack of crisps	_____	_____	_____	_____	_____
4 baguettes	_____	_____	_____	_____	_____
3 packets of spaghetti	_____	_____	_____	_____	_____
2 multipacks of juice	_____	_____	_____	_____	_____
Total Cost	_____	_____	_____	_____	_____

At which store can you buy your items for the LEAST amount of money? _____

At which store can you buy your items for the MOST amount of money? _____

What is the difference in cost between these two stores? _____

How much does sugar cost per kg if bought from Cutcosts? _____

What is the mean cost of spaghetti? _____

If a bag of bananas, a packet of biscuits and a bag of sugar costs £7.51, which store did you buy them from? _____

If you bought 6 packets of spaghetti from Savewell, how much would it cost if you were given 15% off the total cost? _____

You buy 3 boxes of eggs and 2 bags of bananas from Lowcost and pay with £10. Is it correct to expect £1.29 change? _____

Shopping on a Budget

The family are on a tight budget. You have been given the task of shopping for the food items below. You need to spend as little money as possible. Calculate how much the shopping will cost at each store.

Shopping List	Savewell	Cutcosts	Spendless	Lowcost	Thrifty's
2 multipacks of beans	£6.48	£6.40	£6.38	£6.52	£6.30
1 box of eggs	£1.29	£1.25	£1.27	£1.24	£1.19
2 bags of bananas	£5.00	£3.72	£5.04	£4.98	£5.02
2 packets of biscuits	£5.24	£5.32	£3.96	£5.36	£5.40
1 bag of sugar	£2.09	£2.25	£2.21	£2.28	£2.30
2 bags of apples	£2.72	£2.70	£1.40	£2.76	£2.74
1 multipack of crisps	£2.73	£2.71	£2.79	£1.96	£2.75
4 baguettes	£4.24	£4.40	£2.16	£4.48	£4.60
3 packets of spaghetti	£8.70	£8.58	£8.73	£8.67	£8.37
2 multipacks of juice	£4.40	£3.42	£4.48	£4.44	£4.52
Total Cost	£42.89	£40.75	£38.42	£42.69	£43.19

At which store can you buy your items for the LEAST amount of money? **Spendless**

At which store can you buy your items for the MOST amount of money? **Thrifty's**

What is the difference in cost between these two stores? **£4.77**

How much does sugar cost per kg if bought from Cutcosts? **75p**

What is the mean cost of spaghetti? **£2.87**

If a bag of bananas, a packet of biscuits and a bag of sugar costs £7.51, which store did you buy them from? **Thrifty's**

If you bought 6 packets of spaghetti from Savewell, how much would it cost if you were given 15% off the total cost? **£14.79**

You buy 3 boxes of eggs and 2 bags of bananas from Lowcost and pay with £10. Is it correct to expect £1.29 change? **No, £1.30 change.**