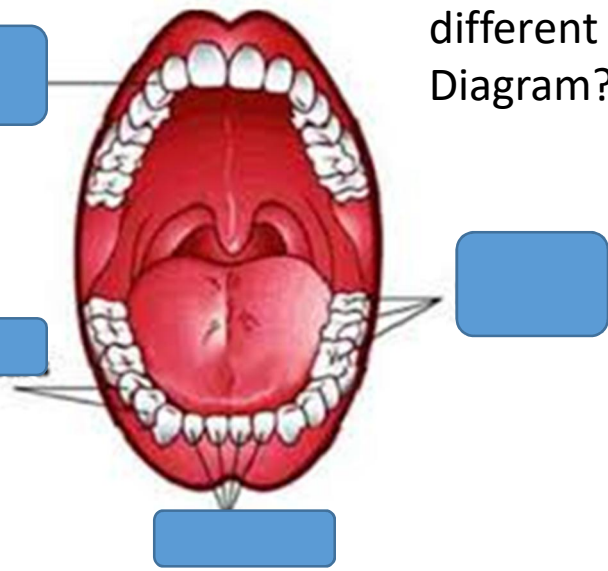


tion

Can you find out
The correct names for the
different teeth on this
Diagram?



you write some sentences to
ain how to keep your teeth
thy?



If you have a ruler at home can you measure
objects to the nearest centimetre? Remember
to make sure you start at zero and hold the ru
really still. Can you draw what you have
measured then write its length in cm's.




















Look in a mirror. What colour hair
have you got? What colour are your
eyes? Can you draw a self portrait?
I would love to see them.

s; Today we are revising
und 'ar' as in moon.

ar	
car	barn
jar	mark
bar	park
part	part
far	start
star	sharp
farm	harm

Star Wars resources. It is free of copyright for classroom use. All other uses are strictly © copyright. All rights reserved.
www.starwarsresources.com

My Phase 3 Sound Mat

j	v	w	x	y	z	zz	qu
							
ch	sh	th	ng	ai	ee	igh	oo
							
oo	oo	ar					
							

Practise the sounds we have revised so far.


<https://new.phonicsplay.co.uk/>

Remember there are lots of games you can access on Phonics play for free at the moment to support phonics learning. Username: **march20**
Password: **home**

Remember
read every



Can you practise for
of the single sound
neatly as you can.



I Arithmetic

1. $49 + 2 =$

2. $20 + 9 =$

3. $15 + 4 =$

4. $53 + 9 =$

5. $15 + 6 =$

6. $52 + 2 =$

7. $55 + 9 =$

8. $16 + 5 =$

9. $68 + 7 =$

10. $21 + 6 =$

- Using the Suffix – less or - full

Can you read this story and choose whether each word in blue needs the suffix **-ful** or **-less** to make sense?

The Two Sisters

There once lived two sisters. One was always losing things, she was extremely **care** . The other sister was very brave, she was absolutely **fear** . They were both very **beauti** . One day the **care** sister lost her way in the forest. It started to get dark, and she began to feel **help** and alone. She couldn't see where she was going and fell in a patch of nettles. How **pain** ! She was **hope** that her **fear** sister would come and rescue her...




Can you write the end of the story using adjectives ending in **-ful** and **-less**?

Weight

Choose 3 tins, packets or boxes and find where weight is written. Line them up in order by looking at their weight.



Choose some different sized objects. Is the largest object always the heaviest? Why? Why not?



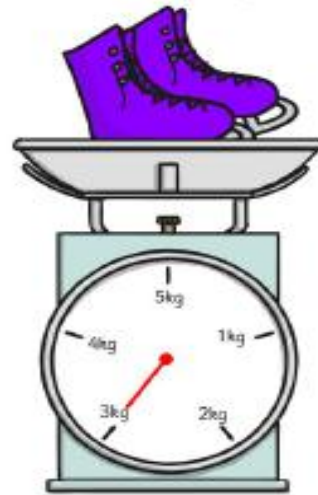
Bags of sugar weigh 2kg each. I buy 8 bags to bake treats for my party, how many kg of sugar is that?



I buy 12kg of dog food. I use half of it. How many kg do I have left?



My skates weigh 2kg more than my friend's. How much do my friend's skates weigh?



Challenge

Here are pictures of eggs that were left in different liquids (high sugar cola, water, high sugar juice drink) for 3 days. Which liquid do you think each egg was in?



01



02



03

What would happen if we left the eggs for a week? Why do you think this?

Now that you have done this experiment, what advice would you give someone about keeping their teeth healthy? Why?



Can you write your own instructions on how to keep your teeth healthy?

Keeping My Teeth Healthy

It is very important to keep my teeth healthy. Here are some of the things I must do to help keep my teeth from going bad.

		
I must brush my teeth twice every _____.	I must use a fluoride _____ when I brush my teeth.	I must _____ good for _____.
I must visit the _____ regularly to check my teeth.	Drinking water with _____ added is good for my teeth.	Flossing _____ helps to _____ small bits _____.
		

find the names for different teeth?

